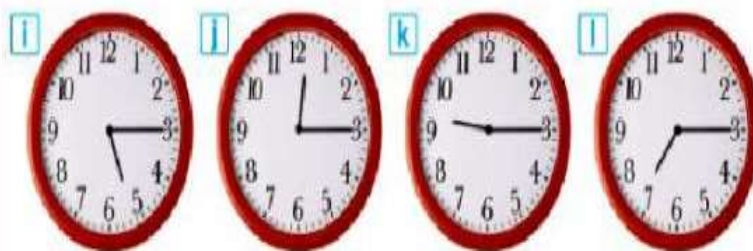



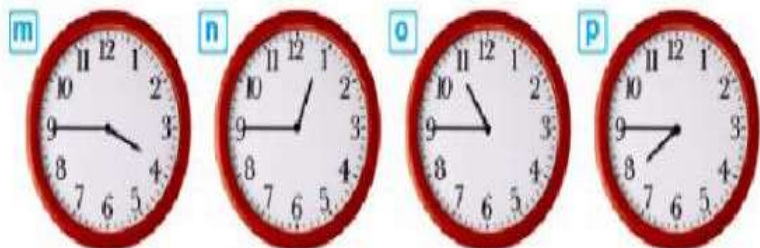
- 1 It's ten o'clock.
- 2 It's seven o'clock.
- 3 It's five o'clock.
- 4 It's three o'clock.

- 5 It's half past eleven.
- 6 It's half past four.
- 7 It's half past one.
- 8 It's half past six.



- 9 It's quarter past seven.
- 10 It's quarter past nine.
- 11 It's quarter past five.
- 12 It's quarter past twelve.

- 13 It's quarter to four.
- 14 It's quarter to eight.
- 15 It's quarter to eleven.
- 16 It's quarter to one.



Zadanie 1

Dopaduj zegarki do podpisów.

Zadanie 2

Napisz godziny słownie.



.....



.....



.....



.....



.....



.....



.....



.....



.....